


Unit 7 – Addition within 20

Complete the number bonds to show the addition.

1 Here are 20 snails.



a) Fill in the missing numbers.

There are  .

There are  .

b) Complete the number sentence.

$$\square + \square = 20$$

2 Here are 20 butterflies.



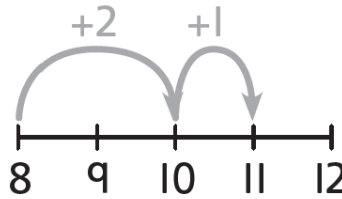
Complete the number sentence.

$$\square + \square = 20$$

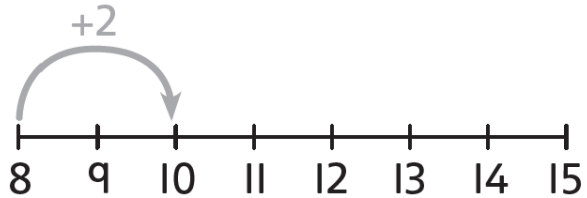
1 Complete these additions by making 10.

Use the number lines to help you.

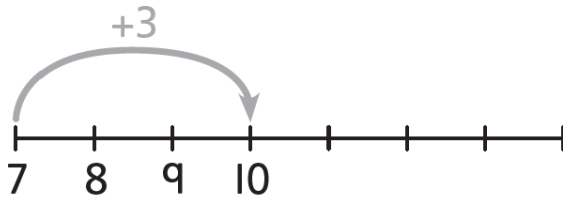
a) $8 + 3 = \square$



b) $8 + 6 = \square$



c) $7 + 5 = \square$



2

I have 9 . Izzy

Charlie I have 4 .

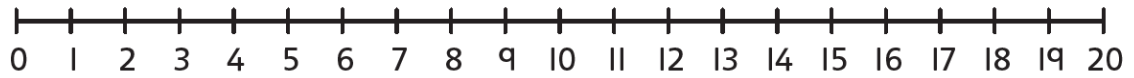
How many do Izzy and Charlie have in total?

$\square + \square = \square$

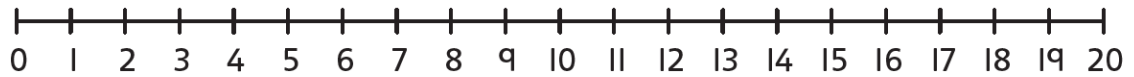
A number line starting at 9 and 10. A curved arrow starts at 9 and jumps to 10.

3 Complete these additions by making 10.

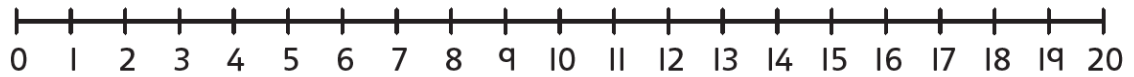
a) $5 + 9 = \square$



b) $3 + 9 = \square$



c) $9 + 9 = \square$



d) $\square = 7 + 6$

